

## Reading

- Which phrase tells the reader that the life cycle is continuous?
- List all of the ways that seeds are dispersed?
- Summarise the main points of this text in 20 words or less.
- How does the word 'searching' help you to understand the job of the root?

## The Life Cycle of a Flower

- In the beginning all you need, Is a simple, unsuspecting seed.
- Giving the plant the ideal condition, To germinate must be your mission.
- Within no time, you will see a shoot, Followed by a searching root.
- The root will anchor to the ground, The sprout reaches and light is found.
- The plant grows taller; grows a stem, Growing thicker and thicker, again and again.
- Leaves appear as if overnight, Spreading out to catch the light.
- Once fully grown, a flower is spotted, With seeds inside and petals dotted.
- Flowers - pink, blue and red, Now have seeds they need to spread.
- Blown by the wind; carried by a bird, Caught on fur; this is how they are dispersed.
- No matter how, no matter when, The cycle will now start again.



## Grammar

### Section 1

Tick the sentence that is written in the passive form.

The hen laid an enormous egg.

An enormous egg was laid by the hen.



### Section 2

Change these nouns/adjectives into verbs by adding the suffixes -ise, -ify or -en.

advert - \_\_\_\_\_

straight - \_\_\_\_\_

### Section 4

Can you think of a preposition and a collective noun beginning with...

	preposition	collective noun	determiner
The letter b?			
The letter t?			

### Section 5

Can you place the commas in the correct place in this sentence:

Even though she was extremely tired the brave explorer kept on trekking.



### Section 3

Clumsy Mr Whoops has lost the antonyms to these words. Can you help him to add 'in' or 'un' prefixes?



likely

correct

### Section 6

Place a colon in this sentence to introduce the list.

The picnic basket contained three items lemonade, apples and currant buses.

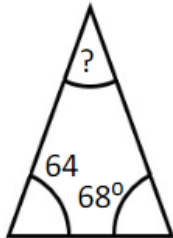


## Maths

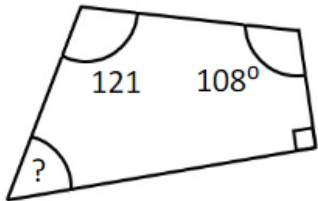
### Calculating Angles in Quadrilaterals & Triangles

Find the missing angle in each shape

1.)



2.)



### Back to Basics

$$3.) \frac{7905}{31} =$$

$$4.) 5,555 \times 55 =$$

$$5.) 3,288 + 10,455 =$$

$$5.) 4,388 - 2,551 =$$

## Spelling

Create your own word search using the 5/6 statutory spellings. Bring it in and let others solve it.

### Year 5 and 6 Statutory Spellings

accommodate	category	determined	foreign	lightning	profession	sincerely
accompany	cemetery	develop	forty	marvellous	programme	soldier
according	committee	dictionary	frequently	mischievous	pronunciation	stomach
achieve	communicate	disastrous	government	muscle	queue	sufficient
aggressive	community	embarrass	guarantee	necessary	recognise	suggest
amateur	competition	environment	harass	neighbour	recommend	symbol
ancient	conscience	equip	hindrance	nuisance	relevant	system
apparent	conscious	equipped	identity	occupy	restaurant	temperature
appreciate	controversy	equipment	immediate	occur	rhyme	thorough
attached	convenience	especially	immediately	opportunity	rhythm	twelfth
available	correspond	exaggerate	individual	parliament	sacrifice	variety
average	criticise	excellent	interfere	persuade	secretary	vegetable
awkward	curiosity	existence	interrupt	physical	shoulder	vehicle
bargain	definite	explanation	language	prejudice	signature	yacht
bruise	desperate	familiar	leisure	privilege	sincere	

### SPORT WORD SEARCH

J J V K G O M S H O O T I N G F V K Z P  
L M H M R N U I P O N I X P E A Y T I T  
I L Q S G N I L T S E R W N I Y K E S I  
V Z A M I V O M K E D V C Z E O W S A B  
O L U B I W R A M E S I L K R Q K C X V  
L H I S T X N K B I N U C X E V W I M  
L Z R I L O E E B G W O H H C H N T E O  
E U H N D O O D T Z H S Y C O O S E T  
Y F K N X E L F M E L R H H O F T A D O  
B J V E E N Y O C A L V O U S U N N X R  
A O T T I I U I P R B M Y U K I M R S  
L G D L O B O X I N G T A T N A M Y B P  
L M P D Y K O D U J K N I T P E D G A O  
C H E E R L E A D I N G O A W Y A T I R  
S L L A B T E K S A B X M R L Z B Y T T  
G O L F C G N I L C Y C R G I A M S V S  
M Z F Y W P M T E K C I R C F D R X H O  
D Z K L L A B E S A B A H S U Q I T I L  
U L L A B T O O F N A C I R E M A R S Y  
M T E B D B R R W U F E H R O R X P G Z

#### WORD LIST

AMERICAN FOOTBALL CYCLING ICE HOCKEY SOCCER  
BADMINTON JUDO FENCING MIXED MARTIAL ARTS SWIMMING  
BASEBALL FOOTBALL GOLF POLO TABLE TENNIS  
BASKETBALL MOTOR SPORTS VOLLEYBALL  
BOXING GRIDIRON SHOOTING WRESTLING  
CRICKET CHEER LEADING OLYMPICS

Handmade  
GIFTS MADE EASY

Pick a challenge to complete this week.


**Geography**

Go litter picking in your local area, making sure you have asked an adult first. Make sure you are wearing gloves if you have to pick the litter up with your hands. Have a look at the types of litter that you find. What is the most common type of litter that you collected




**Art**

Make some observational drawings of nature. Remember to add different textures to your drawings e.g line work, cross hatching and include shading where needed.




**Science**

Create a Dichotomous key using different types of animals. Here is a picture of the key below to help you.



**Music**

Listen to your favourite song. Then recreate this using different items that you can find around the house. As a challenge, change the genre of the song that you have chosen. E.g country to pop, rap to blues etc



**PE**

Research about The Ashes Cricket Tournament. Look at the players, stadiums and rules. Why is it called 'The Ashes'? Create a fact file on this topic.



**PSHE**

Make a list of things you are looking forward to and unsure of moving up to a new year group and school.



Year 6's  
Home Learning

Homework due back on  
Wednesday 14th June 2023